



Determine which letter best represents the sum.

1) $\frac{2}{3} + \frac{2}{3}$

3) $\frac{5}{6} + \frac{4}{6}$

5) $\frac{9}{10} + \frac{7}{10}$

7) $\frac{2}{6} + \frac{1}{6}$

9) $\frac{1}{3} + \frac{2}{3}$

11) $\frac{10}{12} + \frac{6}{12}$

13) $\frac{1}{5} + \frac{1}{5}$

2) $\frac{2}{5} + \frac{1}{5}$

4) $\frac{1}{2} + \frac{1}{2}$

6) $\frac{3}{10} + \frac{3}{10}$

8) $\frac{3}{4} + \frac{3}{4}$

10) $\frac{5}{6} + \frac{3}{6}$

12) $\frac{9}{10} + \frac{2}{10}$

14) $\frac{3}{4} + \frac{1}{4}$

Answers

1. _____

2. _____

3. _____

4. _____

5. _____

6. _____

7. _____

8. _____

9. _____

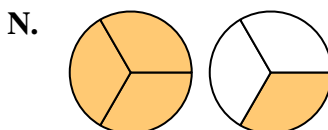
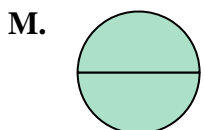
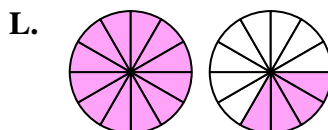
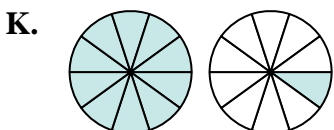
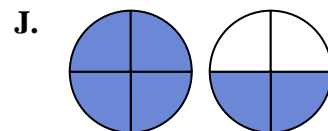
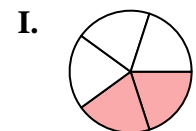
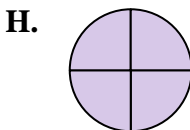
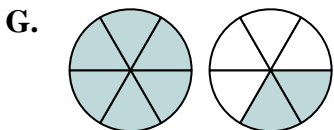
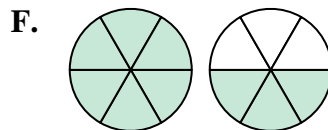
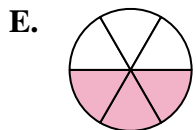
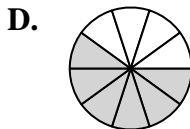
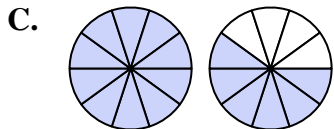
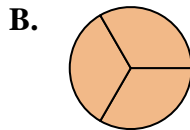
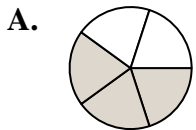
10. _____

11. _____

12. _____

13. _____

14. _____





Determine which letter best represents the sum.

1) $\frac{2}{3} + \frac{2}{3}$

3) $\frac{5}{6} + \frac{4}{6}$

5) $\frac{9}{10} + \frac{7}{10}$

7) $\frac{2}{6} + \frac{1}{6}$

9) $\frac{1}{3} + \frac{2}{3}$

11) $\frac{10}{12} + \frac{6}{12}$

13) $\frac{1}{5} + \frac{1}{5}$

2) $\frac{2}{5} + \frac{1}{5}$

4) $\frac{1}{2} + \frac{1}{2}$

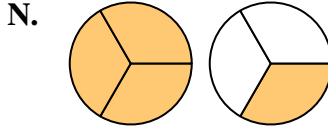
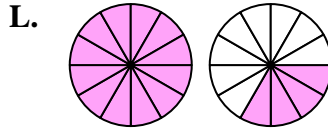
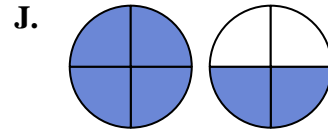
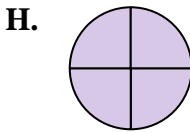
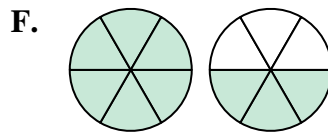
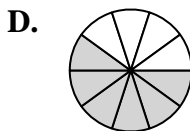
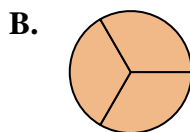
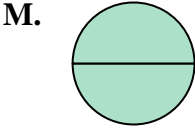
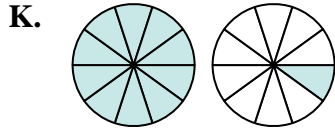
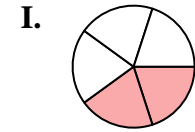
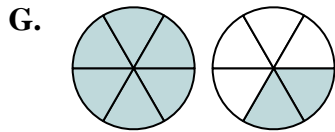
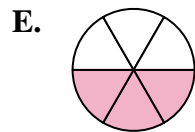
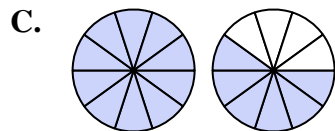
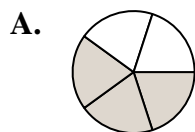
6) $\frac{3}{10} + \frac{3}{10}$

8) $\frac{3}{4} + \frac{3}{4}$

10) $\frac{5}{6} + \frac{3}{6}$

12) $\frac{9}{10} + \frac{2}{10}$

14) $\frac{3}{4} + \frac{1}{4}$



Answers

1. **N** $1\frac{1}{3}$

2. **A** $\frac{3}{5}$

3. **F** $1\frac{3}{10}$

4. **M** $\frac{2}{2}$

5. **C** $1\frac{6}{10}$

6. **D** $\frac{6}{10}$

7. **E** $\frac{3}{6}$

8. **J** $1\frac{2}{4}$

9. **B** $\frac{3}{3}$

10. **G** $1\frac{2}{6}$

11. **L** $1\frac{4}{12}$

12. **K** $1\frac{1}{10}$

13. **I** $\frac{2}{5}$

14. **H** $\frac{4}{4}$